









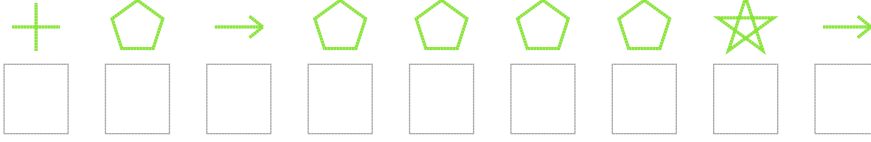


# Şekil Sayı Eşleştirme

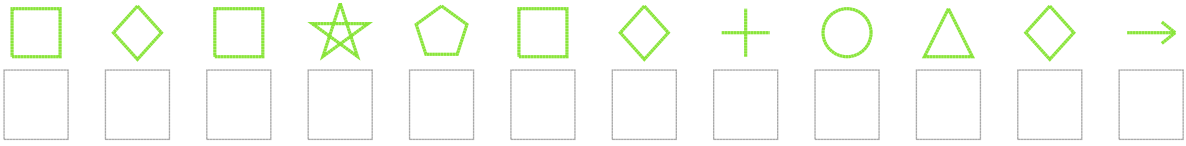
 = 4	 = 3	 = 5	 = 6	 = 9	 = 1	 = 7	 = 2	 = 0	 = 8
--	--	--	--	--	--	---	--	--	--

Aşağıdaki uzun şifreleri hatasız çözerek altlarına yazın:

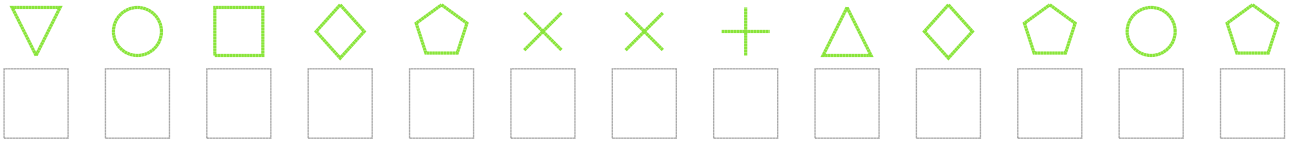
1. Şifre



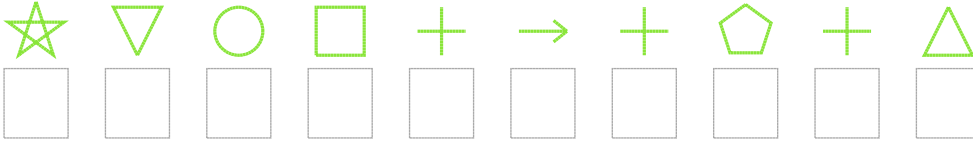
2. Şifre



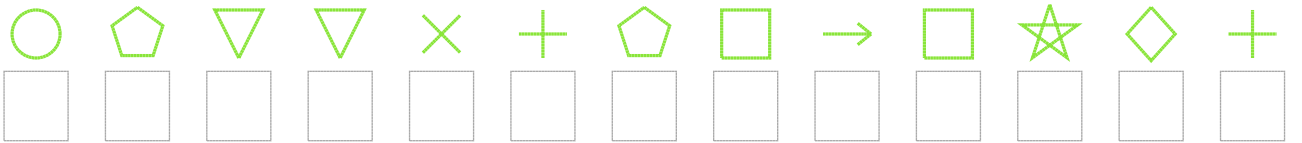
3. Şifre



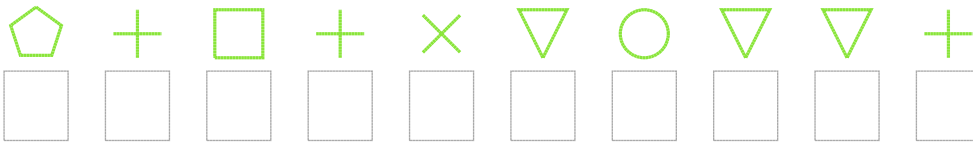
4. Şifre



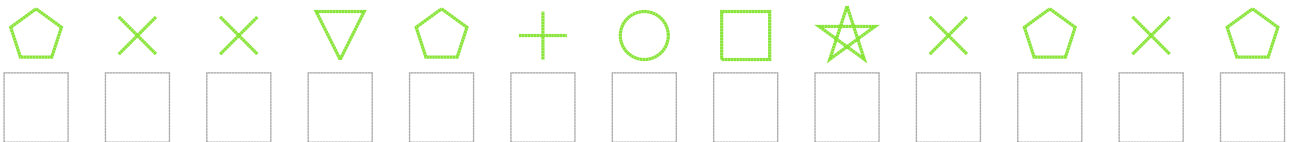
5. Şifre



6. Şifre



7. Şifre



❑ BONUS: 2. ve 7. şifrenin ikinci rakamının toplamı kaçtır? .....

## Cevap Anahtarı

1. Şifre: 231333341
2. Şifre: 686436825081
3. Şifre: 7568399208353
4. Şifre: 4756212320
5. Şifre: 5377923616482
6. Şifre: 3262975772
7. Şifre: 3997325649393

□ Bonus Soru Cevabı: 17